

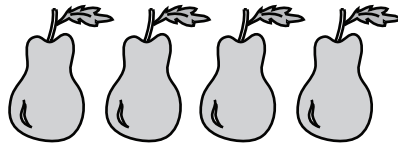
Weight Calculation - Metric Units

Calculate the weight.

1)



=



Weight of each  = _____ g

2)

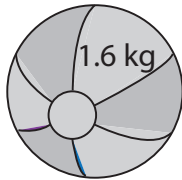


=




Weight of each  = _____ g

3)

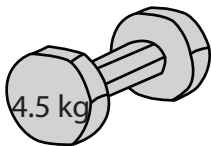


=




ch  = _____ g

4)



=




ch  = _____ kg

5)



=




ch  = _____ g

6)



=



Weight of each  = _____ g

7)



=



Weight of each  = _____ g

PREVIEW

Access the largest collection of
worksheets for just **\$19.95** per year!

Members, please
log in to
download this
worksheet.

Log in

Not a member?
Please sign up to
gain complete
access.

Sign up

www.mathworksheets4kids.com

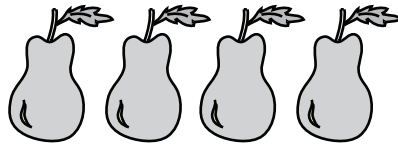
Weight Calculation - Metric Units

Calculate the weight.

1)



=



Weight of each  = **75** g

2)

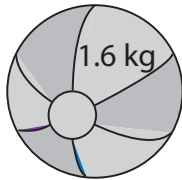


=




Weight of each  = **60** g

3)

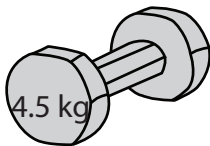


=




ch  = **800** g

4)



=




ch  = **1½** kg

5)



=



ch  = **700** g

6)



=




Weight of each  = **90** g

7)



=



Weight of each  = **750** g

PREVIEW

Access the largest collection of
worksheets for just **\$19.95** per year!

Members, please
log in to
download this
worksheet.

Log in

Not a member?
Please sign up to
gain complete
access.

Sign up

www.mathworksheets4kids.com