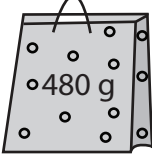
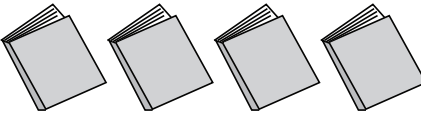



Weight Calculation - Metric Units

Calculate the weight.

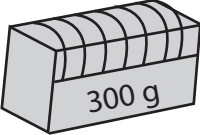
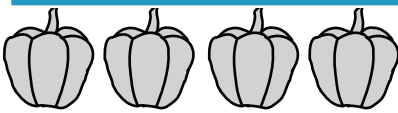

1)  =  Weight of each  = _____ g




2)  =  Weight of each  = _____ g

3)  = _____ ch  = _____ kg

4)  = _____ ch  = _____ g

5)  = _____ ch  = _____ g

6)  =  Weight of each  = _____ g

7)  =  Weight of each  = _____ g

PREVIEW

Access the largest collection of
worksheets for just **\$19.95** per year!

Members, please
log in to
download this
worksheet.

Log in

Not a member?
Please sign up to
gain complete
access.

Sign up

www.mathworksheets4kids.com


Weight Calculation - Metric Units

Calculate the weight.

1)



=



Weight of each  = 120 g

2)



=



Weight of each  = 600 g

3)



=

PREVIEW

Access the largest collection of worksheets for just **\$19.95** per year!


Members, please log in to download this worksheet.

Log in

Not a member? Please sign up to gain complete access.

Sign up


www.mathworksheets4kids.com

ch  = 2½ kg

4)




=

ch  = 175 g

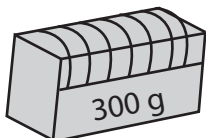
5)



=

ch  = 400 g

6)



=



Weight of each  = 75 g

7)



=



Weight of each  = 900 g