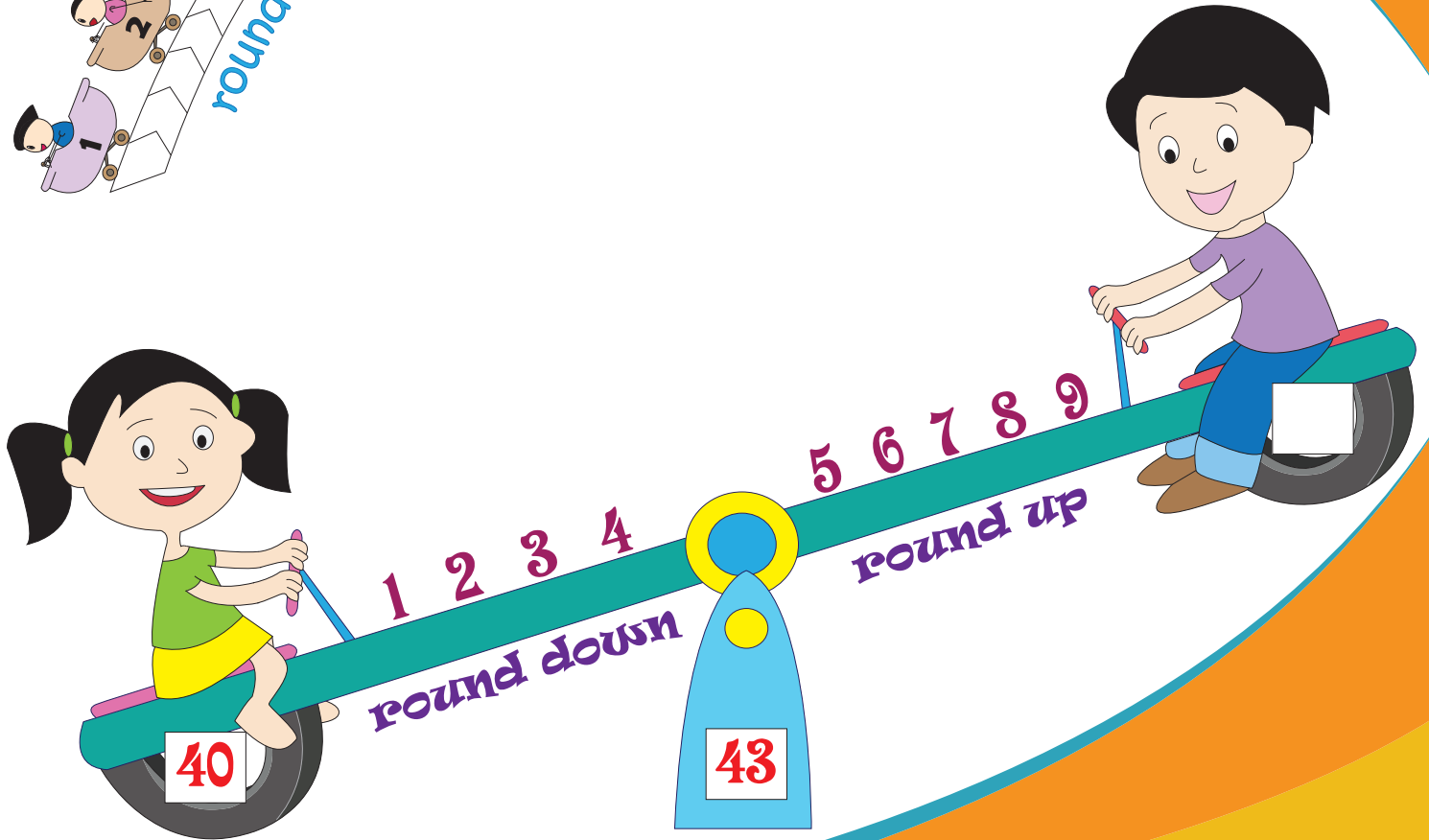



3rd Grade

Rounding

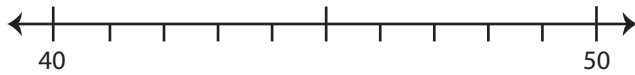


Round Up/Round Down

A) Round each number to the nearest ten using number line.

1) 42

i) Label 42 on the number line.

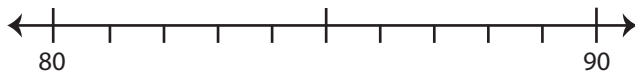


ii) 42 rounded to the nearest ten is _____

iii) Did you round up or round down? Explain.

2) 89

i) Label 89 on the number line.



ii) 89 rounded to the nearest ten is _____

iii) Did you round up or round down? Explain.

B)

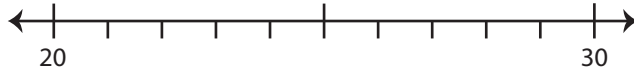
Q.No	Number	Round to the nearest ten	Rounded up / Rounded down
1)	31		
2)	68		
3)	92		
4)	73		
5)	15		

Rounding: Number Line

Round each number to the nearest ten using number line.

1) 23

i) Label 23 on the number line.

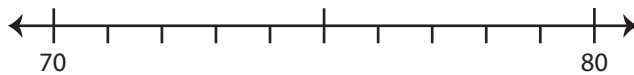


ii) Which is closer to 23? a) 20 b) 30

iii) 23 rounded to the nearest ten is _____

2) 78

i) Label 78 on the number line.

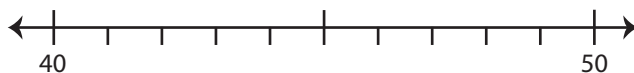


ii) Which is closer to 78? a) 70 b) 80

iii) 78 rounded to the nearest ten is _____

3) 44

i) Label 44 on the number line.

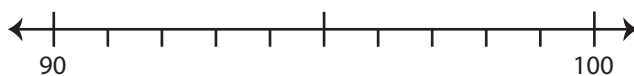


ii) Which is closer to 44? a) 40 b) 50

iii) 44 rounded to the nearest ten is _____

4) 96

i) Label 96 on the number line.



ii) Which is closer to 96? a) 90 b) 100

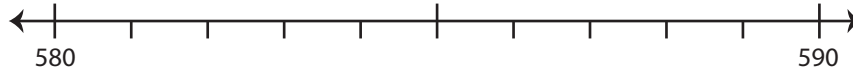
iii) 96 rounded to the nearest ten is _____

Rounding: Number Line

Round each number to the nearest ten using number line.

1) 583

i) Label 583 on the number line.

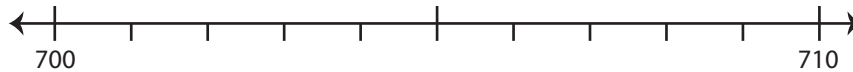


ii) Which is closer to 583? a) 590 b) 580

iii) 583 rounded to the nearest ten is _____

2) 709

i) Label 709 on the number line.

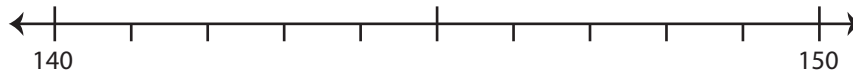


ii) Which is closer to 709? a) 710 b) 700

iii) 709 rounded to the nearest ten is _____

3) 142

i) Label 142 on the number line.

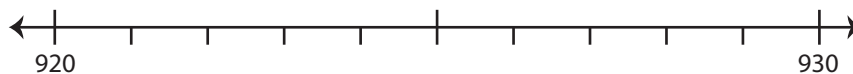


ii) Which is closer to 142? a) 150 b) 140

iii) 142 rounded to the nearest ten is _____

4) 926

i) Label 926 on the number line.



ii) Which is closer to 926? a) 930 b) 920

iii) 926 rounded to the nearest ten is _____

Pages 4 to 8 are available only for members.

Subscribe to unlock 200+ math
workbooks and 40,000+ worksheets
in all subjects.

Scroll down for additional free pages.

Multiple Response

- 1) Round the numbers to the nearest hundred. Which of the following numbers round to 6,400?
a) 6,324 b) 6,368 c) 6,279 d) 6,312 e) 6,445 f) 6,352

- 2) Round the numbers to the nearest ten. Which of the following numbers round to 270?
a) 271 b) 269 c) 265 d) 273 e) 264 f) 267

- 3) Round the numbers to the nearest ten. Which of the following numbers round to 90?
a) 94 b) 89 c) 82 d) 92 e) 81 f) 87

- 4) Round the numbers to the nearest hundred. Which of the following numbers round to 700?
a) 671 b) 605 c) 682 d) 707 e) 755 f) 714

- 5) Round the numbers to the nearest hundred. Which of the following numbers round to 7,300?
a) 7,303 b) 7,270 c) 7,315 d) 7,998 e) 7,294 f) 7,493

- 6) Round the numbers to the nearest ten. Which of the following numbers round to 140?
a) 135 b) 142 c) 147 d) 139 e) 136 f) 144

- 7) Round the numbers to the nearest hundred. Which of the following numbers round to 500?
a) 471 b) 513 c) 583 d) 469 e) 555 f) 465

Rounding - MCQ

- 1) Round 6,482 to the nearest hundred.
a) 6,400 b) 6,000 c) 6,500 d) 6,480

- 2) Round 915 to the nearest ten.
a) 900 b) 910 c) 950 d) 920

- 3) Round 84 to the nearest hundred.
a) 100 b) 90 c) 800 d) 80

- 4) Round 539 to the nearest ten.
a) 530 b) 540 c) 500 d) 550

- 5) Round 1,307 to the nearest hundred.
a) 1,000 b) 1,310 c) 1,300 d) 1,400

- 6) Round 3,954 to the nearest ten.
a) 3,900 b) 3,000 c) 3,960 d) 3,950

- 7) Round 786 to the nearest hundred.
a) 800 b) 780 c) 790 d) 700

- 8) Round 46 to the nearest ten.
a) 0 b) 50 c) 40 d) 100