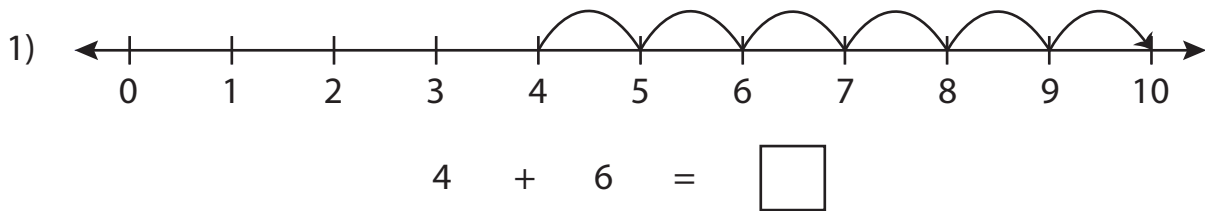


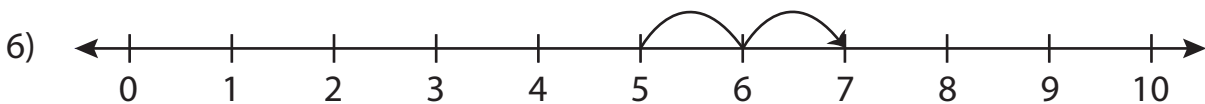
Number Line Addition

0-10: S1

Read each number line and solve the problem.



$$3 + 4 = \square$$



$$5 + 2 = \square$$

PREVIEW

Gain complete access to the largest collection of worksheets in all subjects!

Members, please log in to download this worksheet.

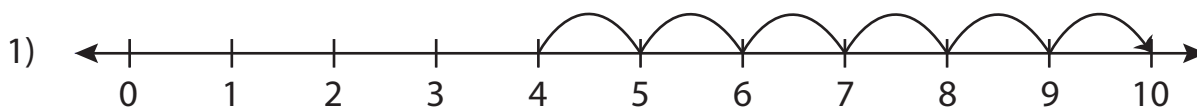
Not a member? Please sign up to gain complete access.

www.mathworksheets4kids.com

Number Line Addition

0-10: S1

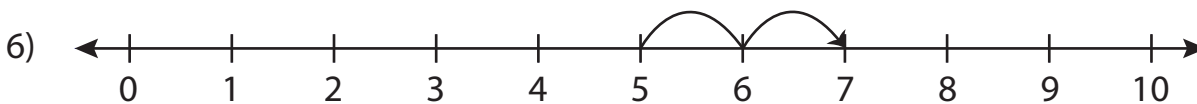
Read each number line and solve the problem.



$$4 + 6 = \boxed{10}$$



$$3 + 4 = \boxed{7}$$



$$5 + 2 = \boxed{7}$$

PREVIEW

Gain complete access to the largest collection of worksheets in all subjects!

Members, please log in to download this worksheet.

Not a member? Please sign up to gain complete access.

www.mathworksheets4kids.com