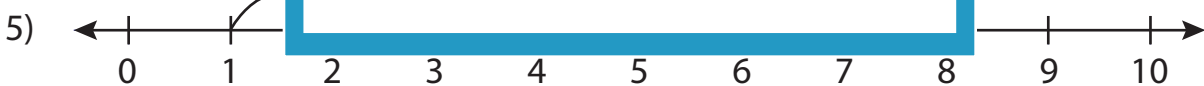
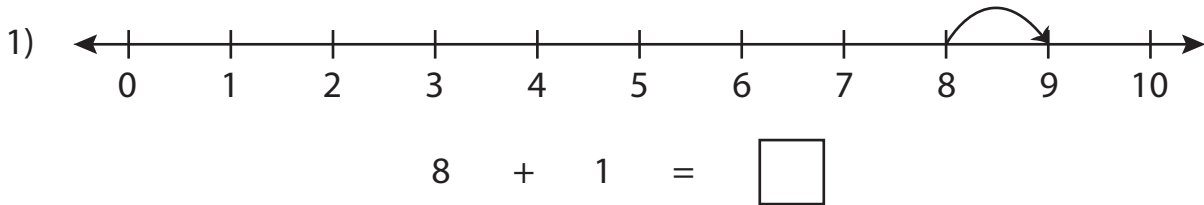


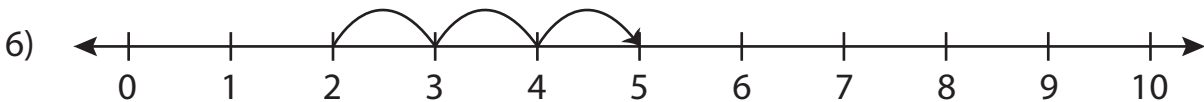
Number Line Addition

0-10: S2

Read each number line and solve the problem.



$$1 + 3 = \square$$



$$2 + 3 = \square$$

PREVIEW

Gain complete access to the largest collection of worksheets in all subjects!

Members, please log in to download this worksheet.

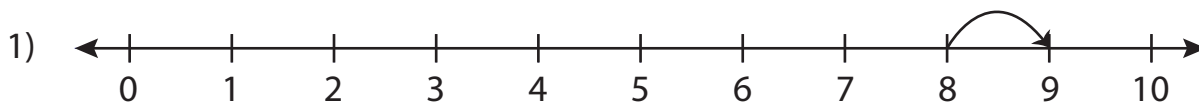
Not a member? Please sign up to gain complete access.

www.mathworksheets4kids.com

Number Line Addition

0-10: S2

Read each number line and solve the problem.



$$8 + 1 = \boxed{9}$$



$$1 + 3 = \boxed{4}$$



$$2 + 3 = \boxed{5}$$

PREVIEW

Gain complete access to the largest collection of worksheets in all subjects!

Members, please log in to download this worksheet.

Not a member? Please sign up to gain complete access.

www.mathworksheets4kids.com