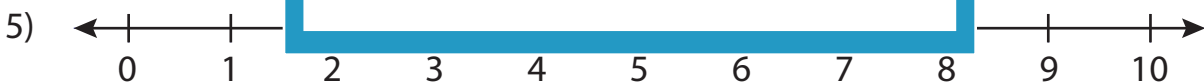
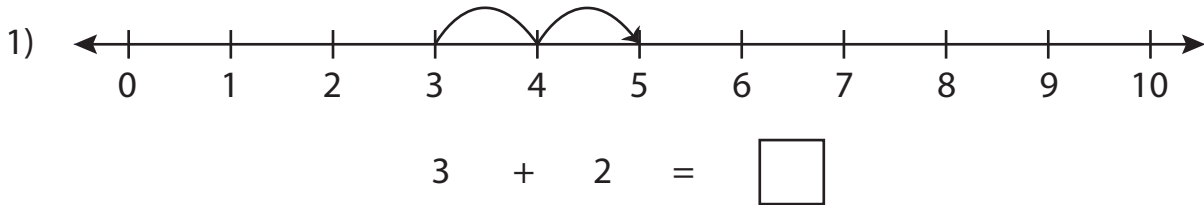


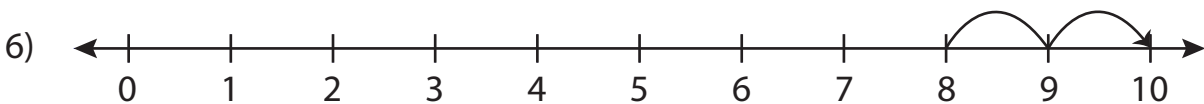
Number Line Addition

0-10: S3

Read each number line and solve the problem.



$$4 + 1 = \square$$



$$8 + 2 = \square$$

PREVIEW

Gain complete access to the largest
collection of worksheets in all subjects!

Members, please
log in to
download this
worksheet.

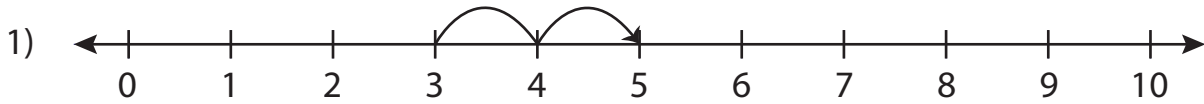
Not a member?
Please sign up to
gain complete
access.

www.mathworksheets4kids.com

Number Line Addition

0-10: S3

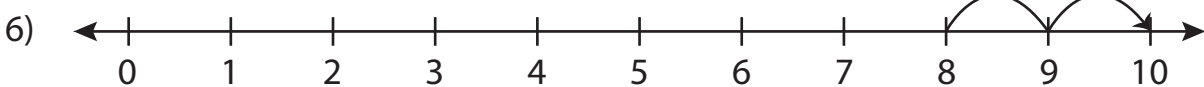
Read each number line and solve the problem.



$$3 + 2 = \boxed{5}$$



$$4 + 1 = \boxed{5}$$



$$8 + 2 = \boxed{10}$$

PREVIEW

Gain complete access to the largest
collection of worksheets in all subjects!

Members, please
log in to
download this
worksheet.

Not a member?
Please sign up to
gain complete
access.

www.mathworksheets4kids.com