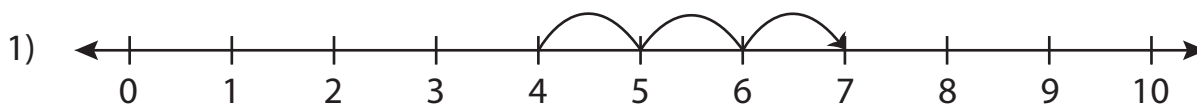


Number Line Addition

0-10: S5

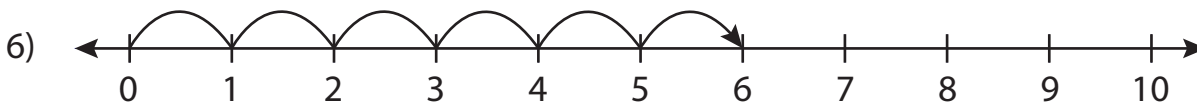
Read each number line and solve the problem.



$$4 + 3 = \square$$



$$6 + 2 = \square$$



$$0 + 6 = \square$$

PREVIEW

Gain complete access to the largest
collection of worksheets in all subjects!

Members, please
log in to
download this
worksheet.

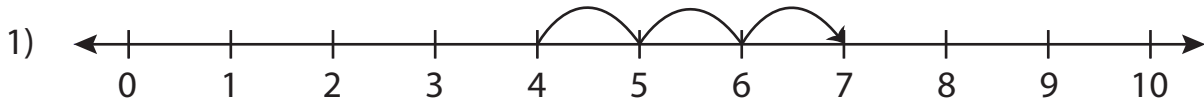
Not a member?
Please sign up to
gain complete
access.

www.mathworksheets4kids.com

Number Line Addition

0-10: S5

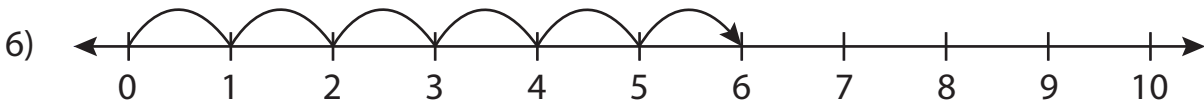
Read each number line and solve the problem.



$$4 + 3 = \boxed{7}$$



$$6 + 2 = \boxed{8}$$



$$0 + 6 = \boxed{6}$$

PREVIEW

Gain complete access to the largest collection of worksheets in all subjects!

Members, please log in to download this worksheet.

Not a member? Please sign up to gain complete access.

www.mathworksheets4kids.com