
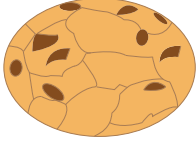



Name : \_\_\_\_\_

# Making a Bar Graph

Eddie is baking pies, cookies, and cupcakes for the fair. Color the appropriate number of boxes and help him represent the information as a bar graph.

		
<b>4</b>	<b>3</b>	<b>9</b>

