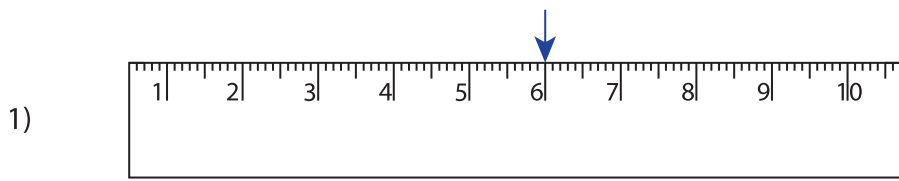


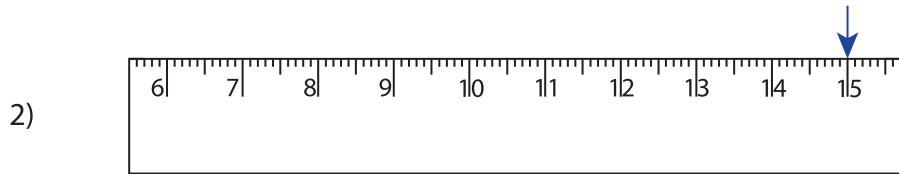
Reading & Marking Ruler

Whole centimeter: S3

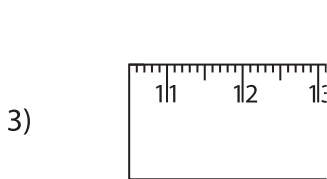
Write the reading shown by the pointer in each problem.



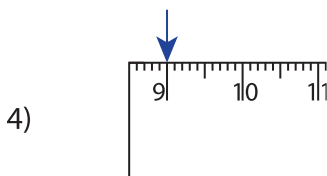
_____ cm



_____ cm



_____ cm



_____ cm

PREVIEW

Gain complete access to the largest collection of worksheets in all subjects!

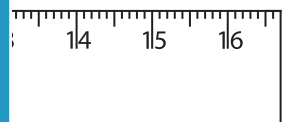
Members, please log in to download this worksheet.

Not a member? Please sign up to gain complete access.

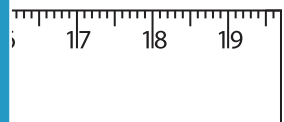
www.mathworksheets4kids.com

Draw the pointer to show


5) 13 cm



6) 19 cm



7) 10 cm



8) 8 cm

