



Line Segment - Ruler

Centimeter: S1

Measure the length of each line segment.



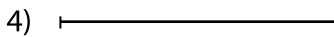
cm




cm



cm



cm



cm

Draw a line segment for

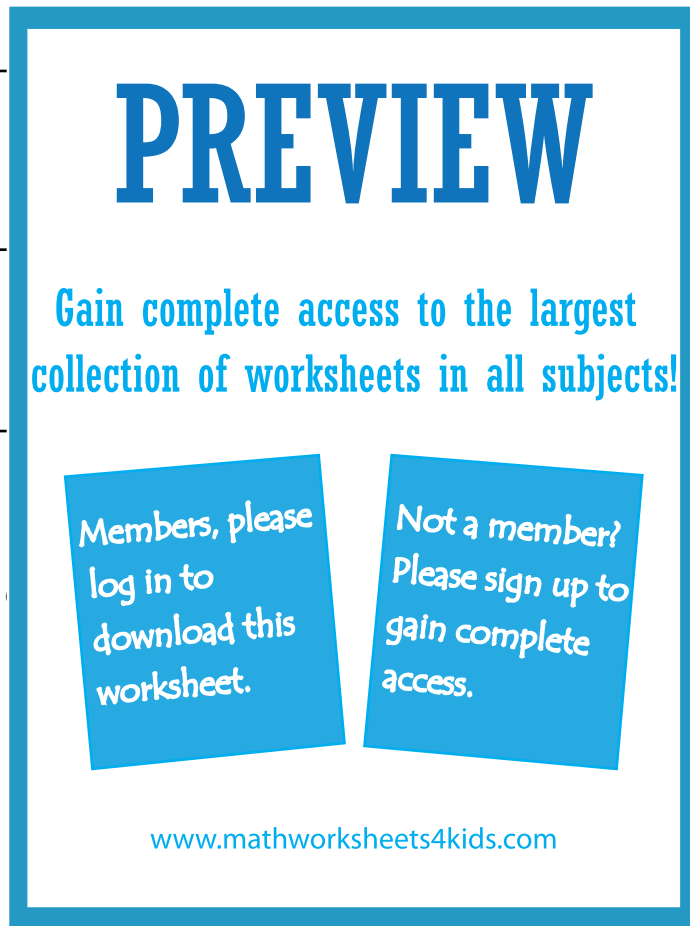
6) 4 cm

7) 9 cm

8) 6 cm

9) 13 cm

10) 7 cm



PREVIEW

Gain complete access to the largest collection of worksheets in all subjects!

Members, please log in to download this worksheet.

Not a member? Please sign up to gain complete access.

www.mathworksheets4kids.com