






Line Segment - Ruler

Centimeter: S2

Measure the length of each line segment.

1)  cm2)  cm3)  cm4)  cm5)  cm

Draw a line segment for

6) 8 cm

7) 2 cm

8) 5 cm

9) 10 cm

10) 12 cm

PREVIEW

Gain complete access to the largest collection of worksheets in all subjects!

Members, please log in to download this worksheet.

Not a member? Please sign up to gain complete access.

www.mathworksheets4kids.com