

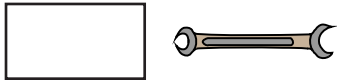
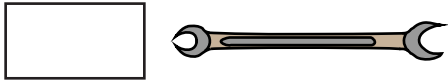
Name : _____

Ordering Sizes

Sheet 1

Write 1 to 3 to show the order from shortest to longest object.

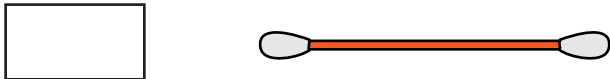
1)



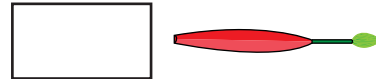
2)



3)

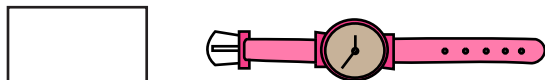
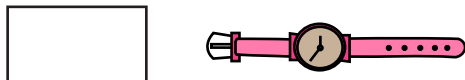
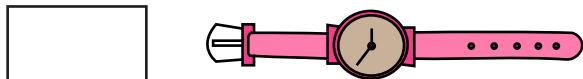


4)

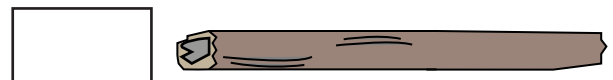


Write 1 to 3 to show the order from longest to shortest object.

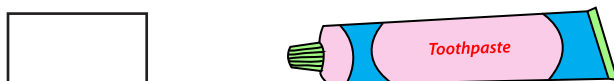
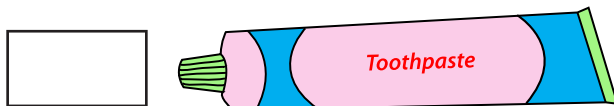
5)



6)



7)



8)

