

Name : _____

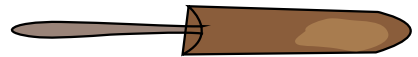
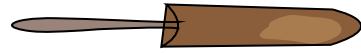
Ordering Sizes

Write 1 to 3 to show the order from shortest to longest object.

1)



2)




3)



PREVIEW



Gain complete access to the largest collection of worksheets in all subjects!



Members, please log in to download this worksheet.

Not a member? Please sign up to gain complete access.



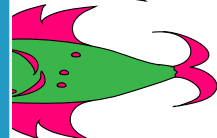

Write 1 to 3 to show the order from shortest to longest object.

5)



Members, please log in to download this worksheet.

Not a member? Please sign up to gain complete access.



7)



8)



Ordering Sizes

Write 1 to 3 to show the order from shortest to longest object.

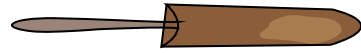
1)

3



2)

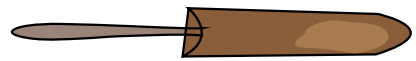
1



2



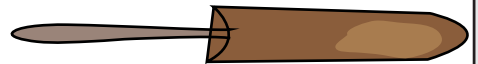
2



1



3



3)


3



PREVIEW



1



Gain complete access to the largest collection of worksheets in all subjects!



2



Write 1 to 3 to show the order from shortest to longest object.


5)

3




Members, please log in to download this worksheet.

Not a member? Please sign up to gain complete access.



2



1



7)

2



8)

1



1



2



3



3

