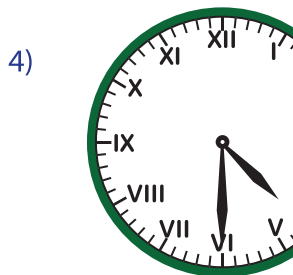


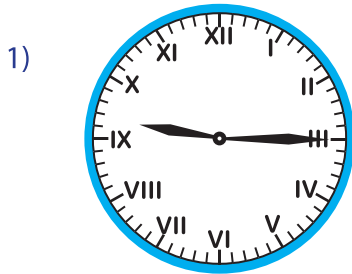


Roman Numerals: Clock

Sheet 3

A) Read the Roman numerals dial and write the time.




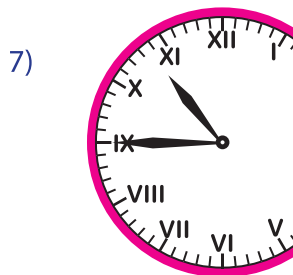
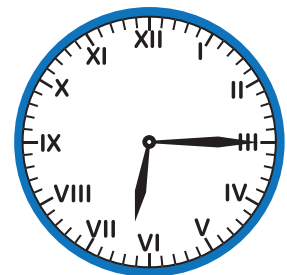
PREVIEW

Gain complete access to the largest
collection of worksheets in all subjects!

Members, please
log in to
download this
worksheet.

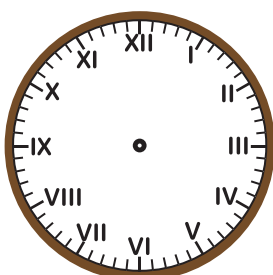
Not a member?
Please sign up to
gain complete
access.

www.mathworksheets4kids.com

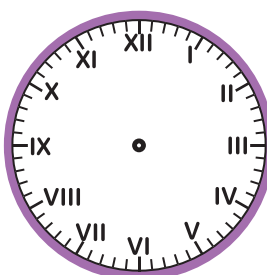


B) Draw the hours and minutes hand for the given time.

1) 8 : 30



2) 9 : 00



3) 11 : 00

