

**Place Value Blocks - 2 Digits**

L1S2

Write the number formed by base ten blocks.

1)

\_\_\_\_\_

2)

\_\_\_\_\_

3)

\_\_\_\_\_

**PREVIEW**

Gain complete access to the largest collection of worksheets in all subjects!

Members, please log in to download this worksheet.

Not a member? Please sign up to gain complete access.

[www.mathworksheets4kids.com](http://www.mathworksheets4kids.com)

\_\_\_\_\_

5)

\_\_\_\_\_

\_\_\_\_\_

7)

\_\_\_\_\_

8)

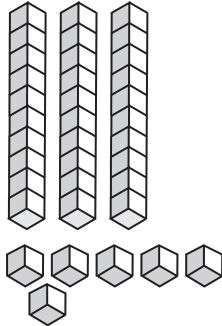
\_\_\_\_\_

**Answer key****Place Value Blocks - 2 Digits**

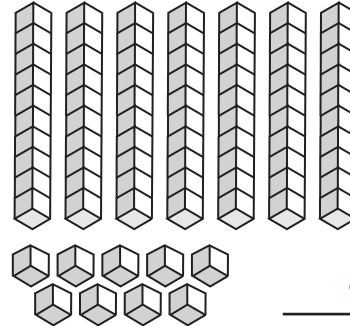
L1S2

Write the number formed by base ten blocks.

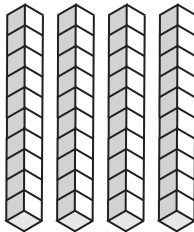
1)

36

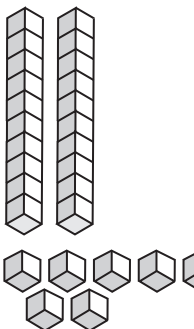
2)

79


3)

52

5)

45

7)

68

8)

11**PREVIEW**

Gain complete access to the largest  
collection of worksheets in all subjects!

Members, please  
log in to  
download this  
worksheet.

Not a member?  
Please sign up to  
gain complete  
access.

[www.mathworksheets4kids.com](http://www.mathworksheets4kids.com)