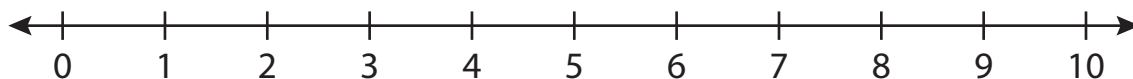


Number Line Subtraction

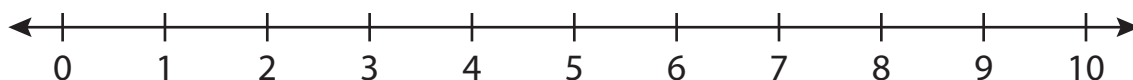
0-10: S1

Indicate hops on each number line and complete the subtraction sentences.

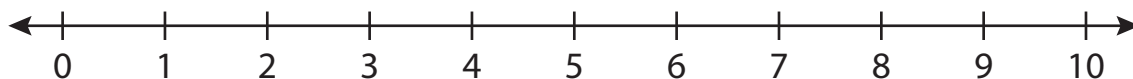
1) $7 - 4 =$ _____



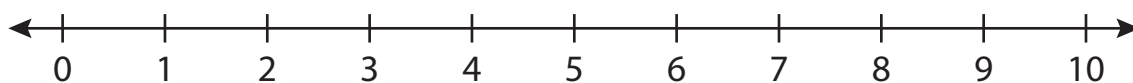
2) $9 - 2 =$ _____



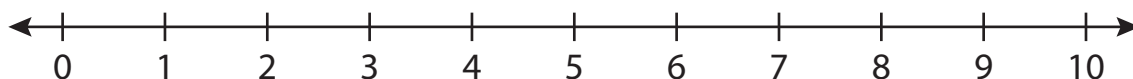
3) $10 - 9 =$ _____



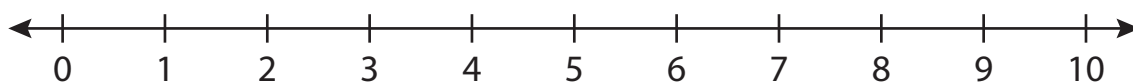
4) $3 - 1 =$ _____



5) $8 - 3 =$ _____



6) $6 - 6 =$ _____

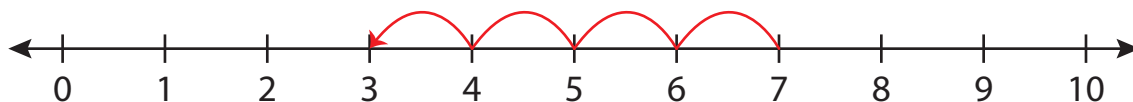


Number Line Subtraction

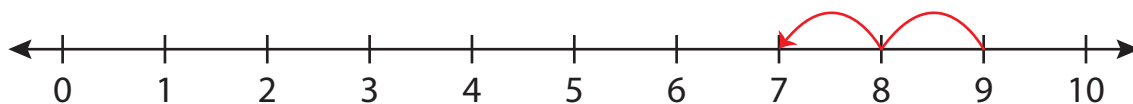
0-10: S1

Indicate hops on each number line and complete the subtraction sentences.

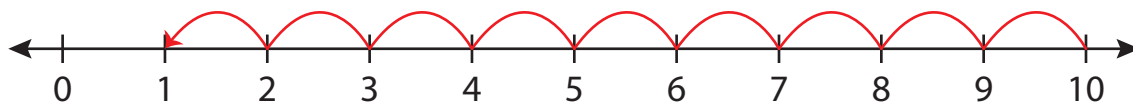
1) $7 - 4 = \underline{3}$



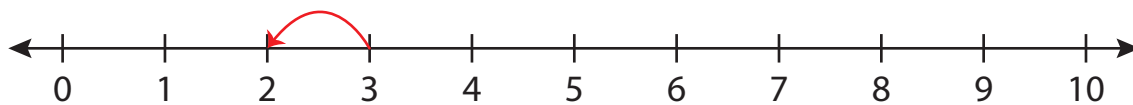
2) $9 - 2 = \underline{7}$



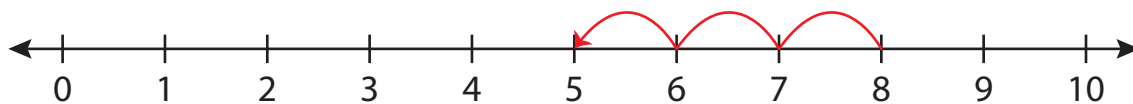
3) $10 - 9 = \underline{1}$



4) $3 - 1 = \underline{2}$



5) $8 - 3 = \underline{5}$



6) $6 - 6 = \underline{0}$

