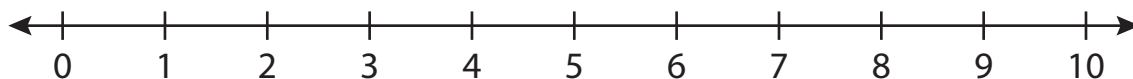


**Number Line Subtraction**

0-10: S2

Indicate hops on each number line and complete the subtraction sentences.

1)  $5 - 1 =$  \_\_\_\_\_



2)  $8 - 6 =$



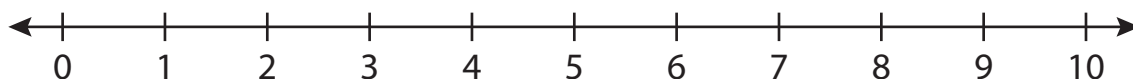
3)  $4 - 3 =$



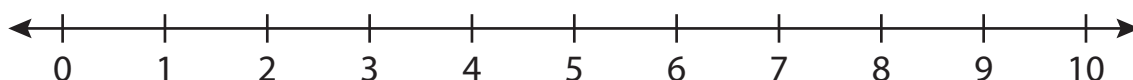
4)  $9 - 4 =$



5)  $2 - 2 =$



6)  $10 - 7 =$  \_\_\_\_\_

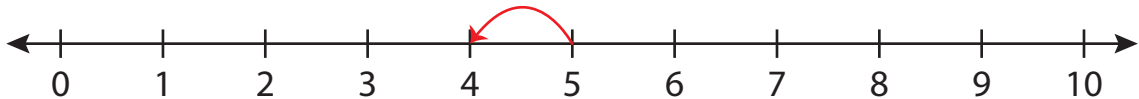
**PREVIEW**Gain complete access to the largest  
collection of worksheets in all subjects!Members, please  
log in to  
download this  
worksheet.Not a member?  
Please sign up to  
gain complete  
access.[www.mathworksheets4kids.com](http://www.mathworksheets4kids.com)

## Number Line Subtraction

0-10: S2

Indicate hops on each number line and complete the subtraction sentences.

1)  $5 - 1 = \underline{4}$



2)  $8 - 6 =$



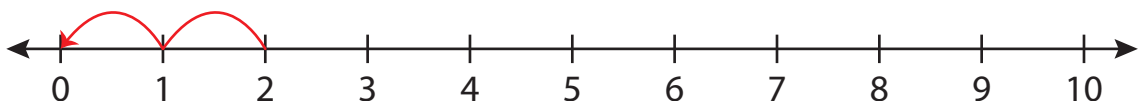
3)  $4 - 3 =$



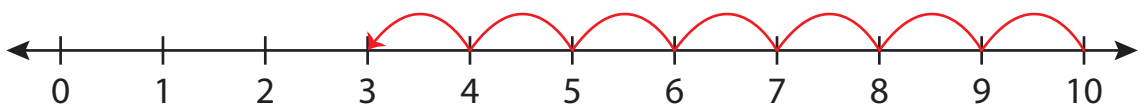
4)  $9 - 4 =$



5)  $2 - 2 =$



6)  $10 - 7 = \underline{3}$



# PREVIEW

Gain complete access to the largest collection of worksheets in all subjects!

Members, please log in to download this worksheet.

Not a member? Please sign up to gain complete access.

www.mathworksheets4kids.com