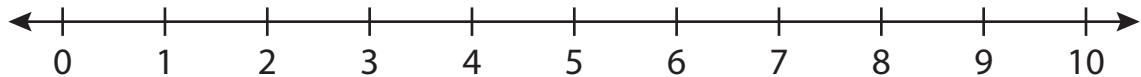


**Number Line Subtraction**

0-10: S3

Indicate hops on each number line and complete the subtraction sentences.

1)  $9 - 8 =$  \_\_\_\_\_



2)  $1 - 1 =$  \_\_\_\_\_



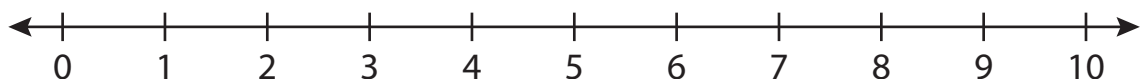
3)  $6 - 4 =$  \_\_\_\_\_



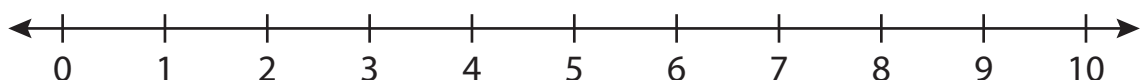
4)  $8 - 2 =$  \_\_\_\_\_



5)  $10 - 5 =$  \_\_\_\_\_



6)  $7 - 3 =$  \_\_\_\_\_

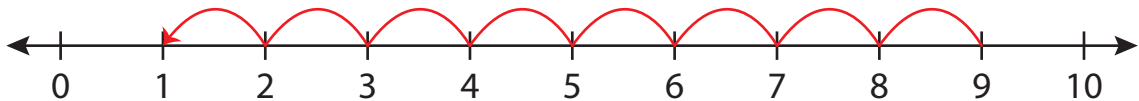


## Number Line Subtraction

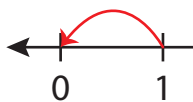
0-10: S3

Indicate hops on each number line and complete the subtraction sentences.

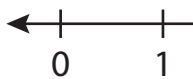
1)  $9 - 8 = \underline{\quad 1 \quad}$



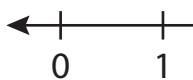
2)  $1 - 1 = \underline{\quad \quad}$



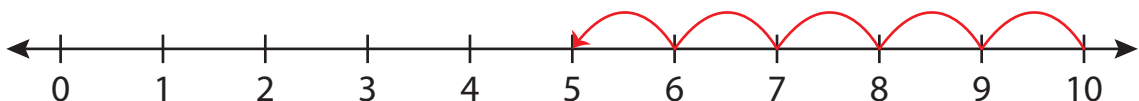
3)  $6 - 4 = \underline{\quad \quad}$



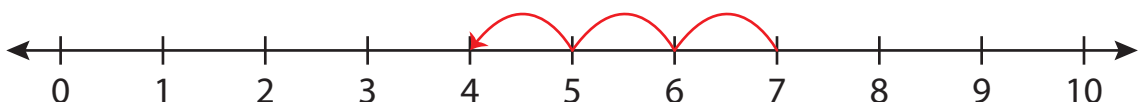
4)  $8 - 2 = \underline{\quad \quad}$



5)  $10 - 5 = \underline{\quad \quad}$



6)  $7 - 3 = \underline{\quad 4 \quad}$



# PREVIEW

Gain complete access to the largest collection of worksheets in all subjects!

Members, please log in to download this worksheet.

Not a member? Please sign up to gain complete access.

www.mathworksheets4kids.com