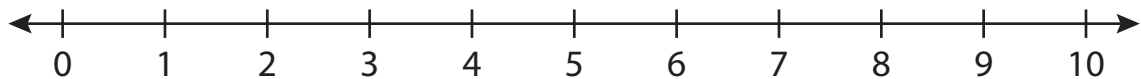


**Number Line Subtraction**

0-10: S5

Indicate hops on each number line and complete the subtraction sentences.

1)  $8 - 7 =$  \_\_\_\_\_



2)  $10 - 8 =$  \_\_\_\_\_



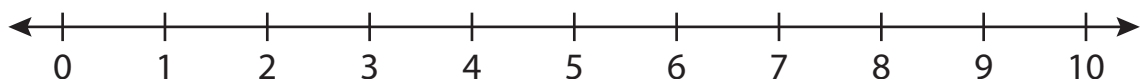
3)  $9 - 6 =$  \_\_\_\_\_



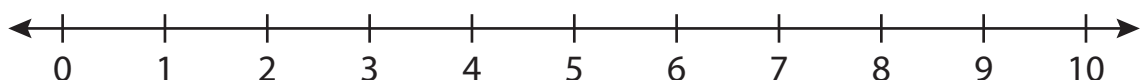
4)  $7 - 5 =$  \_\_\_\_\_



5)  $6 - 2 =$  \_\_\_\_\_



6)  $4 - 4 =$  \_\_\_\_\_

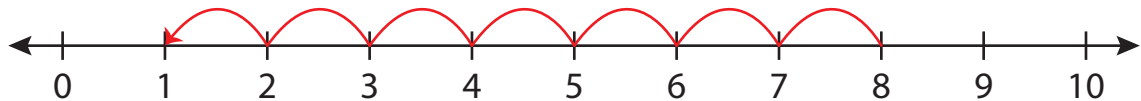
**PREVIEW**Gain complete access to the largest  
collection of worksheets in all subjects!Members, please  
log in to  
download this  
worksheet.Not a member?  
Please sign up to  
gain complete  
access.[www.mathworksheets4kids.com](http://www.mathworksheets4kids.com)

## Number Line Subtraction

0-10: S5

Indicate hops on each number line and complete the subtraction sentences.

1)  $8 - 7 = \underline{1}$



2)  $10 - 8 =$



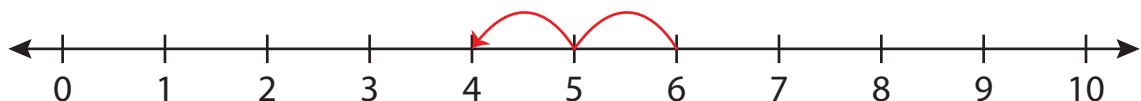
3)  $9 - 6 =$



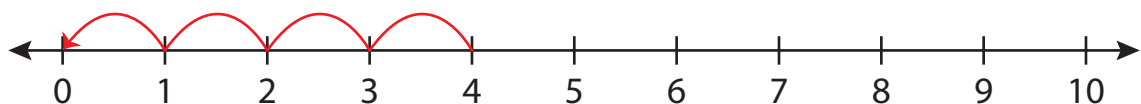
4)  $7 - 5 =$



5)  $6 - 2 =$



6)  $4 - 4 = \underline{0}$



# PREVIEW

Gain complete access to the largest collection of worksheets in all subjects!

Members, please log in to download this worksheet.

Not a member? Please sign up to gain complete access.

[www.mathworksheets4kids.com](http://www.mathworksheets4kids.com)