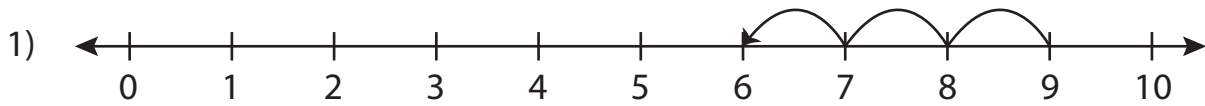


Subtraction Sentence

0-10: S1

Write the subtraction sentence that describes each model.



$$\underline{\quad} - \underline{\quad} = \underline{\quad}$$

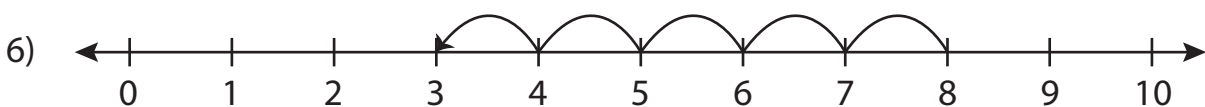








$$\underline{\quad} - \underline{\quad} = \underline{\quad}$$



$$\underline{\quad} - \underline{\quad} = \underline{\quad}$$

PREVIEW

Gain complete access to the largest collection of worksheets in all subjects!

Members, please log in to download this worksheet.

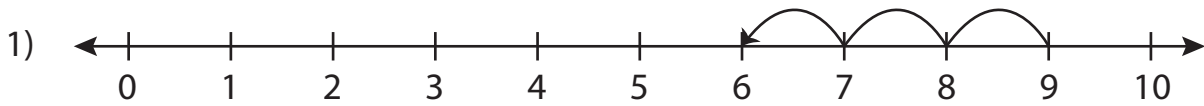
Not a member? Please sign up to gain complete access.

www.mathworksheets4kids.com

Subtraction Sentence

0-10: S1

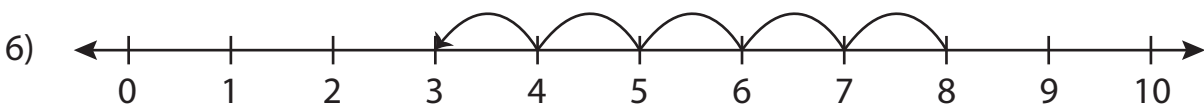
Write the subtraction sentence that describes each model.



$$\underline{9} - \underline{3} = \underline{6}$$



$$\underline{5} - \underline{1} = \underline{4}$$



$$\underline{8} - \underline{5} = \underline{3}$$

PREVIEW

Gain complete access to the largest collection of worksheets in all subjects!

Members, please log in to download this worksheet.

Not a member? Please sign up to gain complete access.

www.mathworksheets4kids.com