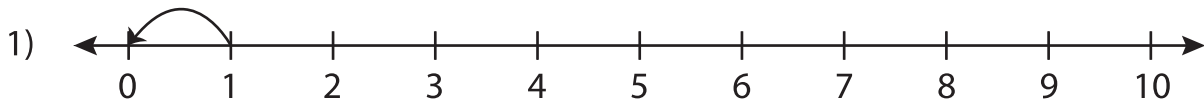


# Subtraction Sentence

0-10: S3

Write the subtraction sentence that describes each model.



$$\underline{\quad} - \underline{\quad} = \underline{\quad}$$



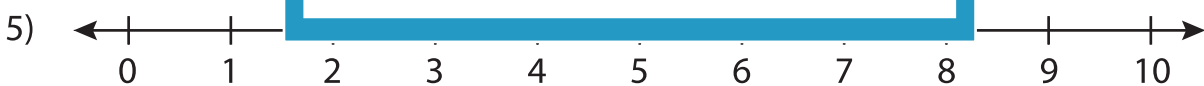
\_\_\_\_\_



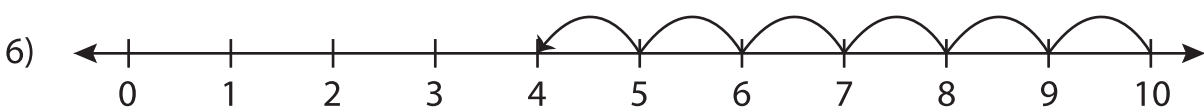
\_\_\_\_\_



\_\_\_\_\_



$$\underline{\quad} - \underline{\quad} = \underline{\quad}$$



$$\underline{\quad} - \underline{\quad} = \underline{\quad}$$

## PREVIEW

Gain complete access to the largest  
collection of worksheets in all subjects!

Members, please  
log in to  
download this  
worksheet.

Not a member?  
Please sign up to  
gain complete  
access.

www.mathworksheets4kids.com