


Name : _____

Telling Time

Half-Hourly: S1

A) Read each clock, and write the time.

1)





2)



3)



4)

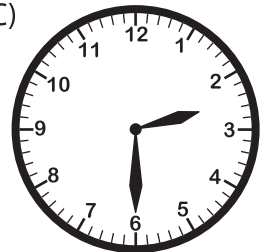


B) Choose the clock


Time : 2:30

www.mathworksheets4kids.com

C)



C) Choose the correct time shown by the clock.



A)

5:30

B)

6:30

C)

7:30