


Name : _____


Telling Time

A) Read each clock, and write the time.


1)




2)



3)



4)

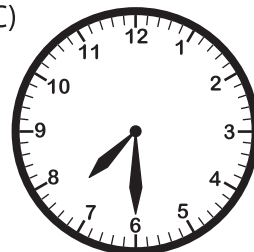


B) Choose the clock

Time : 8:30



C)



C) Choose the correct time shown by the clock.



A)

B)

C)

PREVIEW

Gain complete access to the largest collection of worksheets in all subjects!

Members, please log in to download this worksheet.

Not a member? Please sign up to gain complete access.

www.mathworksheets4kids.com