

Name : _____

Telling Time


Hourly: S1

A) Read each clock, and write the time.

1)




2)




3)



4)



5)




6)




B) Choose the clock that shows the given time.

Time : 4:00


A)



B)



C)



C) Choose the correct time shown by the clock.



A)

12:00

B)

2:00

C)

3:00


Name : _____

Telling Time

Hourly: S1


A) Read each clock, and write the time.

1)



8:00

2)




5:00

3)




10:00

4)




6:00

5)



1:00

6)

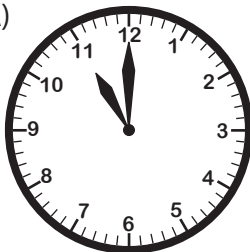


9:00


B) Choose the clock that shows the given time.

Time : 4:00


A)



B)



C)



C) Choose the correct time shown by the clock.



A)

12:00

B)

2:00

C)

3:00