


Name : _____

Telling Time


Hourly: S2

A) Read each clock, and write the time.

1)




2)



3)



4)

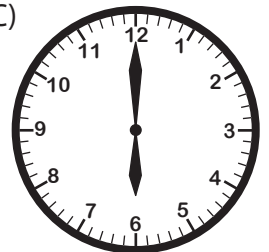


B) Choose the clock

Time : 1:00



C)



C) Choose the correct time shown by the clock.



A)

9:00

B)

11:00

C)

10:00

PREVIEW

Gain complete access to the largest collection of worksheets in all subjects!

Members, please log in to download this worksheet.

Not a member? Please sign up to gain complete access.

www.mathworksheets4kids.com


Name : _____

Telling Time

Hourly: S2


A) Read each clock, and write the time.

1)




5:00

2)




1:00

3)




7:00

4)



3:00



4:00

PREVIEW

Gain complete access to the largest collection of worksheets in all subjects!

Members, please log in to download this worksheet.

Not a member? Please sign up to gain complete access.

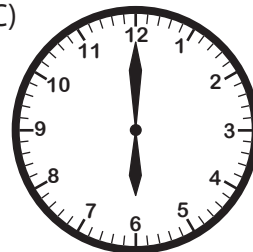
www.mathworksheets4kids.com

B) Choose the clock

Time : 1:00



C)



C) Choose the correct time shown by the clock.



A)

9:00

B)

11:00



10:00