

Name : _____

Telling Time

Hourly: S3

A) Read each clock, and write the time.


1)





2)



3)



4)

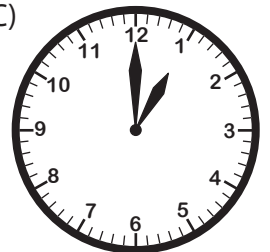


B) Choose the clock

Time : 11:00



C)



C) Choose the correct time shown by the clock.



A)

4:00

B)

3:00

C)

9:00

PREVIEW

Gain complete access to the largest collection of worksheets in all subjects!

Members, please log in to download this worksheet.

Not a member? Please sign up to gain complete access.

www.mathworksheets4kids.com

Name : _____

Telling Time

Hourly: S3

A) Read each clock, and write the time.

1)




10:00

2)




7:00

3)




12:00

4)



7:00



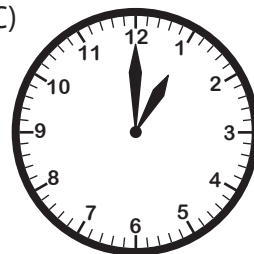
6:00

B) Choose the clock

Time : 11:00



C)



PREVIEW

Gain complete access to the largest collection of worksheets in all subjects!

Members, please log in to download this worksheet.

Not a member? Please sign up to gain complete access.

www.mathworksheets4kids.com

C) Choose the correct time shown by the clock.



A) ✓

4:00

B)

3:00

C)

9:00