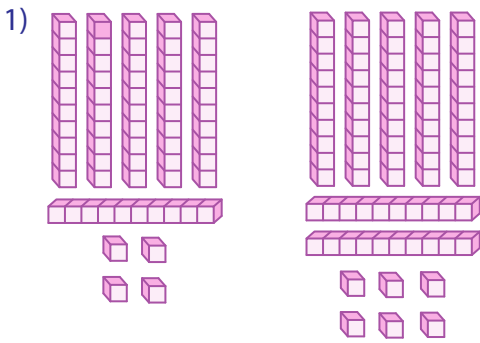
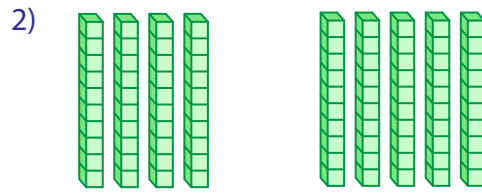


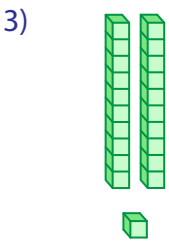
# Base Ten Blocks



$$\square + \square = \square$$



$$\square + \square = \square$$



$$\square + (\square) = \square$$

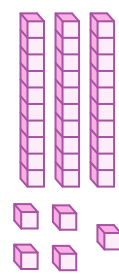
## PREVIEW

Gain complete access to the largest collection of worksheets in all subjects!

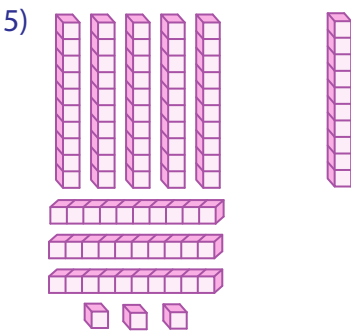
Members, please log in to download this worksheet.

Not a member? Please sign up to gain complete access.

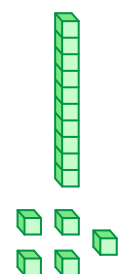
[www.mathworksheets4kids.com](http://www.mathworksheets4kids.com)




$$\square = \square$$



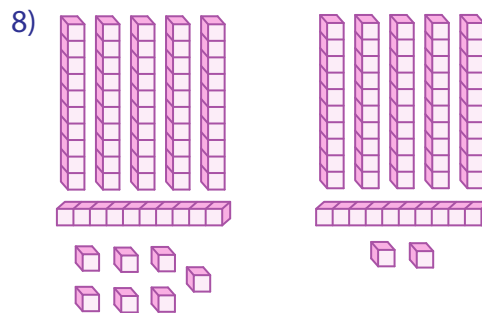
$$\square + (\square) = \square$$



$$\square = \square$$



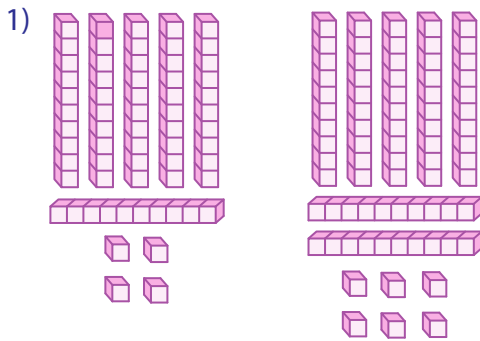
$$\square + \square = \square$$



$$\square + \square = \square$$

## Base Ten Blocks

Sheet 2



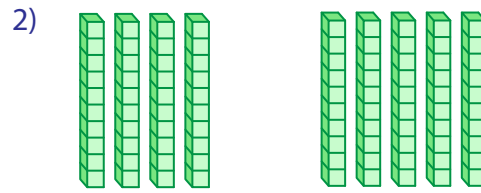
64

+

76

=

140



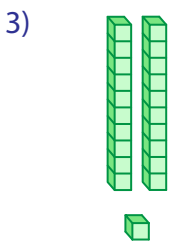
40

+

50

=

90



21

+

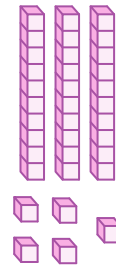
(

Gain complete access to the largest  
collection of worksheets in all subjects!

Members, please  
log in to  
download this  
worksheet.

Not a member?  
Please sign up to  
gain complete  
access.

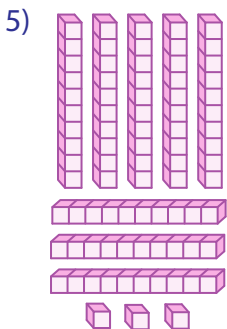
[www.mathworksheets4kids.com](http://www.mathworksheets4kids.com)



35

=

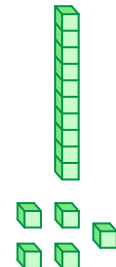
114



83

+

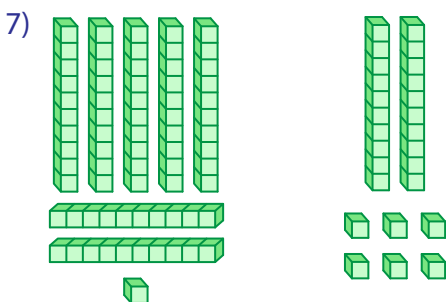
(



15

=

73



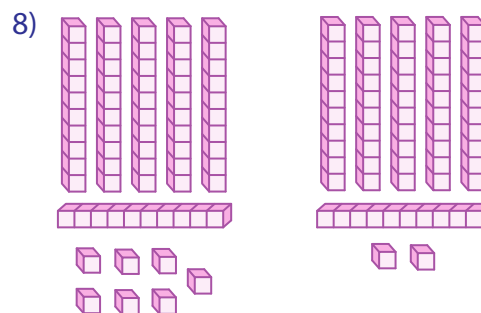
71

+

26

=

97



67

+

62

=

129