


Picture Addition

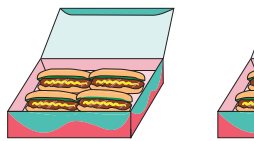
Sheet 1

- 1) There are 3 books on each table. How many books are there altogether?



_____ books

- 2) There are 4 hot dogs in a box. How many hot dogs are in total?



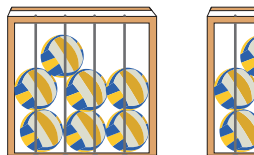
_____ hot dogs

- 3) Each plate has 2



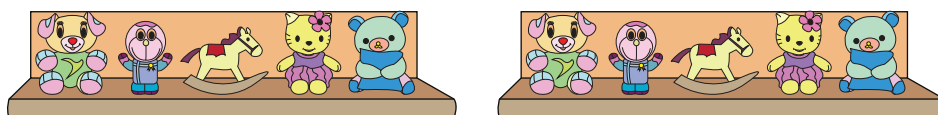
_____ plates

- 4) There are 7 balls



_____ balls

- 5) A shelf has 5 toys. How many toys are there altogether?



_____ toys

PREVIEW

Gain complete access to the largest
collection of worksheets in all subjects!

Members, please
log in to
download this
worksheet.

Not a member?
Please sign up to
gain complete
access.

www.mathworksheets4kids.com