

Picture Addition

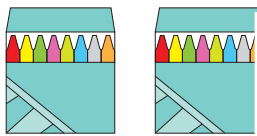
Sheet 2

- 1) There are 4 fish in a fish pot. How many fish are there altogether?




_____ fish

- 2) A pack has 8 crayons. How many crayons are in total?



_____ cra

- 3) There are 7 pear




_____ pe

- 4) A chocolate box



_____ chocolates

- 5) Each branch has two owls. How many owls are in total?



_____ Owls

PREVIEW

Gain complete access to the largest
collection of worksheets in all subjects!

Members, please
log in to
download this
worksheet.

Not a member?
Please sign up to
gain complete
access.

www.mathworksheets4kids.com

together?

there in total?