

Picture Addition


Sheet 3

- 1) There are 5 tea cups in a tray. How many cups are in total?




_____ cups

- 2) A chair has 4 legs. How many legs are in total?



_____ legs

- 3) There are 6 petals



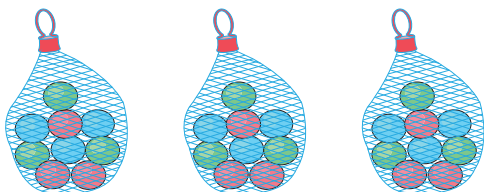
_____ petals

- 4) A bat has 2 wings



_____ wings

- 5) There are 9 marbles in a bag. How many marbles are in total?



_____ marbles

PREVIEW

Gain complete access to the largest collection of worksheets in all subjects!

Members, please log in to download this worksheet.

Not a member? Please sign up to gain complete access.

www.mathworksheets4kids.com