





Bar Graph - Fruit Stand

Mark recorded a data about the fruits sold on a particular day. Draw a bar graph to represent his data and answer the questions.

<p>Apple</p>  <p>7</p>	<p>Mango</p>  <p>5</p>	<p>Pineapple</p>  <p>4</p>	<p>Strawberry</p>  <p>9</p>
---	---	--	--



- 1) Which fruit did Mark sell more: apple or strawberry? _____
- 2) How many pineapples were sold? _____
- 3) How many fewer pineapples than mangoes were sold? _____
- 4) Circle the fruit that was sold the most.

