

Name : \_\_\_\_\_

## Sides and Vertices

Identify each 2D shape, and write the number of sides and vertices.

1)




Sides

Vertices

Name: \_\_\_\_\_

2)



Sides

Vertices

Name: \_\_\_\_\_

3)



Sides

Vertices

Name: \_\_\_\_\_

# PREVIEW

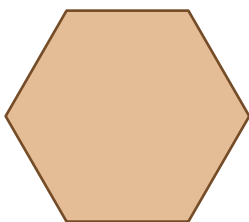
Gain complete access to the largest collection of worksheets in all subjects!

Members, please log in to download this worksheet.

Not a member? Please sign up to gain complete access.

[www.mathworksheets4kids.com](http://www.mathworksheets4kids.com)

5)



Sides

Vertices

Name: \_\_\_\_\_

7)




Sides

Vertices

Name: \_\_\_\_\_

8)



Sides

Vertices

Name: \_\_\_\_\_