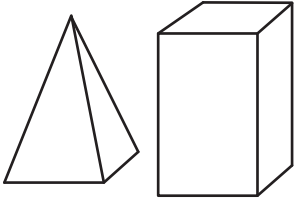


Name : \_\_\_\_\_

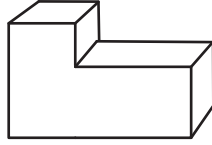
## Composing & Decomposing 3D Shapes

A) Choose the figure formed by composing each pair of 3D shapes.

1)



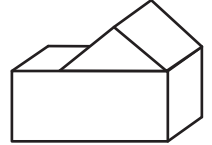
a)



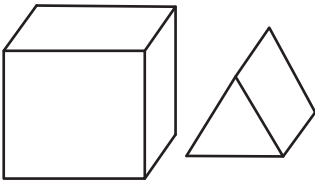
b)




c)



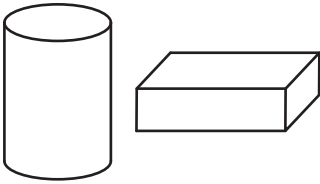
2)



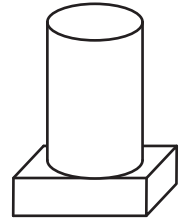
c)



3)




c)



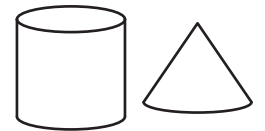
B) Choose the pair of

1)

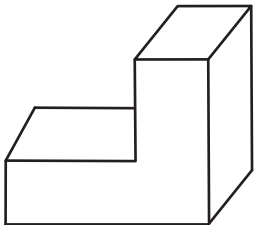


using each figure.

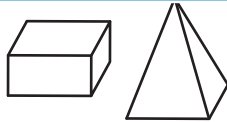
c)



2)



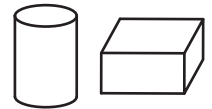
a)



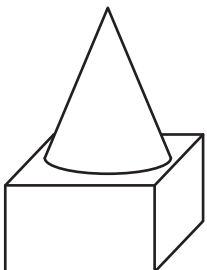
b)



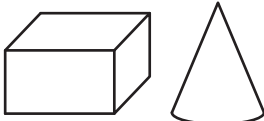
c)



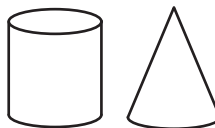
3)



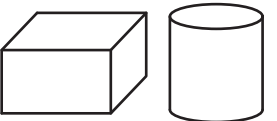
a)



b)



c)



**PREVIEW**

Gain complete access to the largest collection of worksheets in all subjects!

Members, please log in to download this worksheet.

Not a member? Please sign up to gain complete access.

[www.mathworksheets4kids.com](http://www.mathworksheets4kids.com)