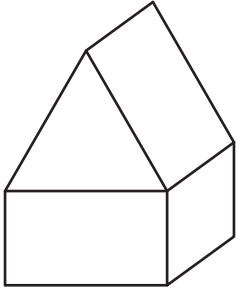


Name : _____


3D Shapes in Composite Figures

Identify and name the 3D shapes in each composite figure.

1)



2)



3)

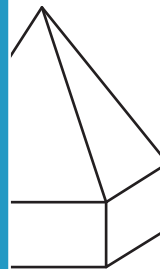


PREVIEW
Gain complete access to the largest collection of worksheets in all subjects!

Members, please log in to download this worksheet.

Not a member? Please sign up to gain complete access.

www.mathworksheets4kids.com



5)

