

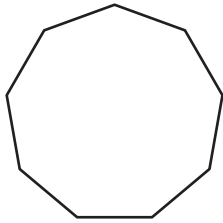
Name : \_\_\_\_\_

## Quadrilaterals

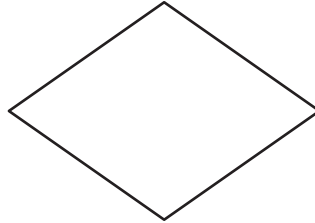
Sheet 2

State whether each shape is a quadrilateral.

1)



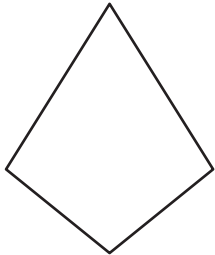
2)



3)



4)



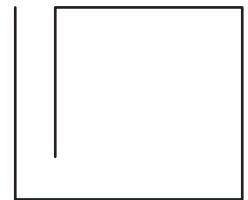
# PREVIEW

Gain complete access to the largest  
collection of worksheets in all subjects!

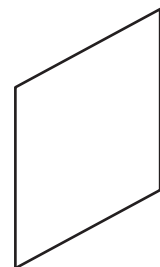
Members, please  
log in to  
download this  
worksheet.

Not a member?  
Please sign up to  
gain complete  
access.

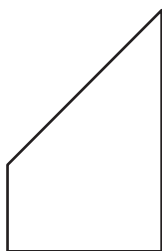
[www.mathworksheets4kids.com](http://www.mathworksheets4kids.com)



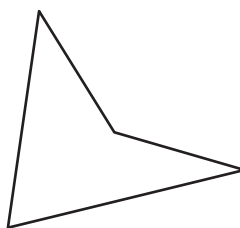
7)



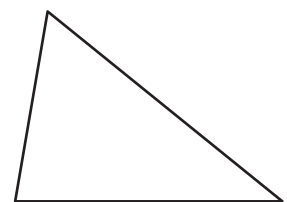
10)



11)



12)



\_\_\_\_\_

\_\_\_\_\_

\_\_\_\_\_