






**Line Segment - Ruler**

Half Inches: S1

Measure the length of each line segment.

1)  in2)  in3)  in4)  in5)  in

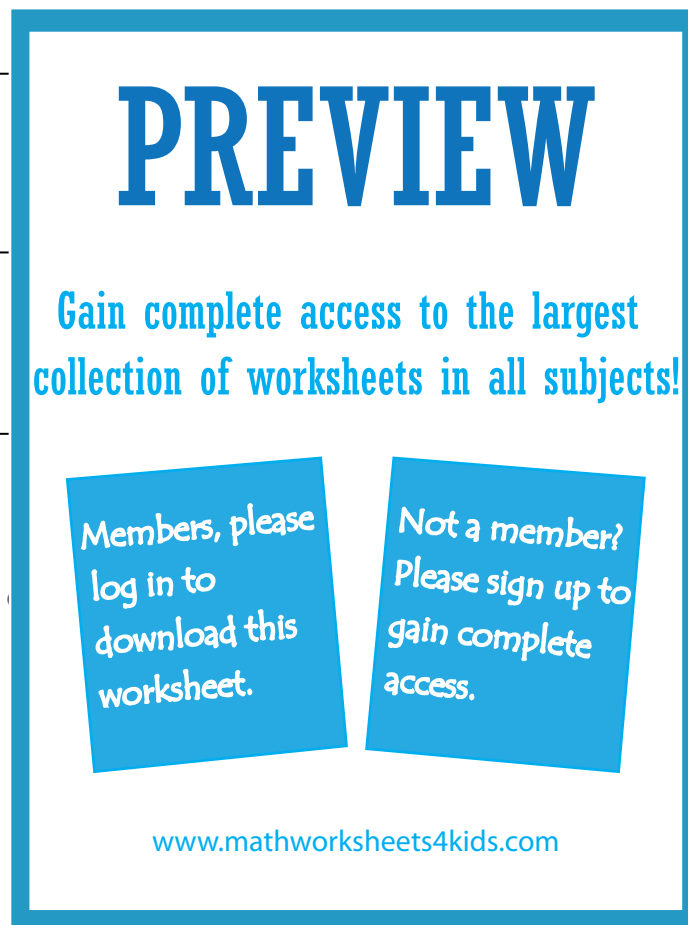
Draw a line segment for

6)  $3\frac{1}{2}$  in

7) 4 in

8)  $2\frac{1}{2}$  in

9) 1 in

10)  $5\frac{1}{2}$  in

**PREVIEW**

Gain complete access to the largest collection of worksheets in all subjects!

Members, please log in to download this worksheet.

Not a member? Please sign up to gain complete access.

[www.mathworksheets4kids.com](http://www.mathworksheets4kids.com)