





Line Segment - Ruler

Half Inches: S3

Measure the length of each line segment.

1)  in2)  in3)  in4)  in5)  in

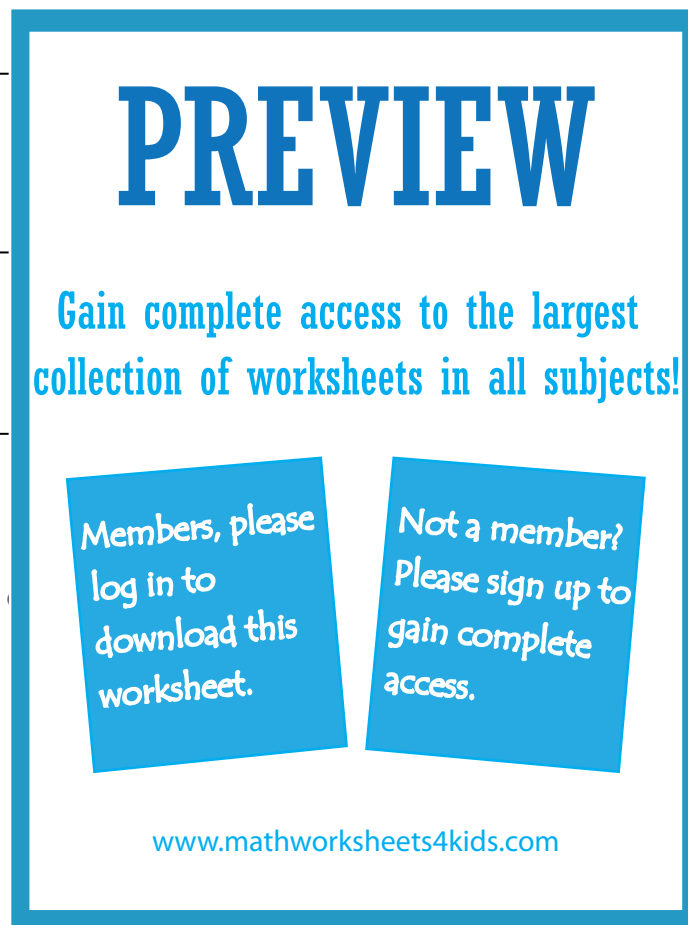
Draw a line segment for

6) $5\frac{1}{2}$ in

7) 1 in

8) $3\frac{1}{2}$ in

9) 6 in

10) $2\frac{1}{2}$ in

PREVIEW

Gain complete access to the largest collection of worksheets in all subjects!

Members, please log in to download this worksheet.

Not a member? Please sign up to gain complete access.

www.mathworksheets4kids.com