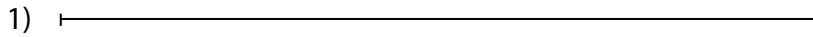



Line Segment - Ruler

Millimeter: 52


Measure the length of each line segment.




mm




mm



mm



mm



mm

Draw a line segment for

6) 131 mm

7) 60 mm

8) 113 mm

9) 40 mm

10) 85 mm

PREVIEW

Gain complete access to the largest collection of worksheets in all subjects!

Members, please log in to download this worksheet.

Not a member? Please sign up to gain complete access.

www.mathworksheets4kids.com