



Line Segment - Ruler

Millimeter: 53

Measure the length of each line segment.




mm




mm



mm



mm



mm

PREVIEW

Gain complete access to the largest collection of worksheets in all subjects!

Members, please log in to download this worksheet.

Not a member? Please sign up to gain complete access.

www.mathworksheets4kids.com

Draw a line segment for

6) 130 mm

7) 65 mm

8) 127 mm

9) 40 mm

10) 73 mm