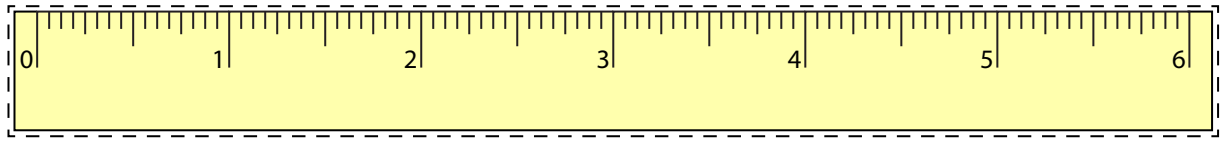







**Line Segment - Ruler**

Half Inches: S3



Cut out the ruler. Measure the length of each line segment.

1)  in2)  in3)  in4)  in5)  in

Draw a line segment for

6)  $3\frac{1}{2}$  in

7) 2 in

8) 4 in

9)  $5\frac{1}{2}$  in

10) 6 in

# PREVIEW

Gain complete access to the largest  
collection of worksheets in all subjects!

Members, please  
log in to  
download this  
worksheet.

Not a member?  
Please sign up to  
gain complete  
access.

www.mathworksheets4kids.com