

Weight - More/Less

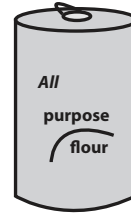
Choose the correct choice that describes the weight of each object.

1)



- More than 2 lb Less than 2 lb

2)



- More than 3 oz Less than 3 oz

3)



- More than 5 lb

4)



- Less than 4 oz

5)



- More than 5 oz



- Less than 15 lb

7)

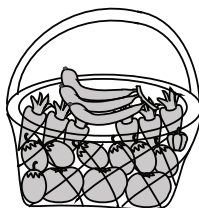


- More than 1 lb Less than 1 lb




- More than 10 oz Less than 10 oz

9)



- More than 2 oz Less than 2 oz

10)



- More than 25 oz Less than 25 oz

PREVIEW

Gain complete access to the largest collection of worksheets in all subjects!

Members, please log in to download this worksheet.

Not a member? Please sign up to gain complete access.

www.mathworksheets4kids.com