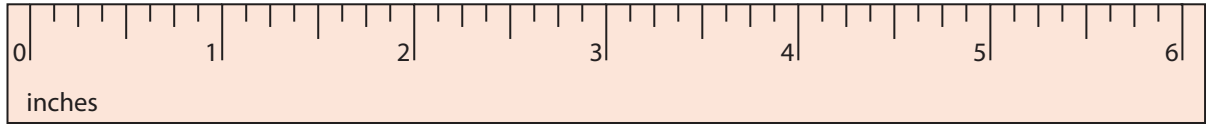
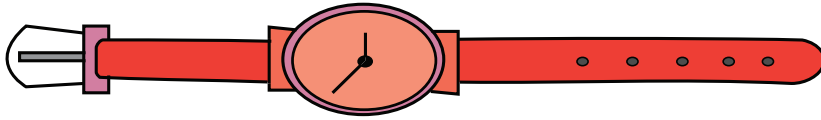


**Measuring Objects - Quarters**

Type 2: S1

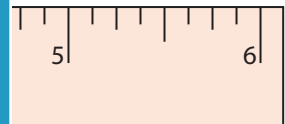
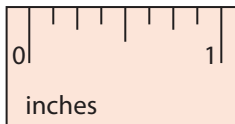
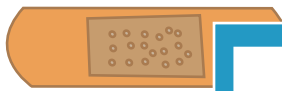
Measure each object to the nearest quarter inches.

1)



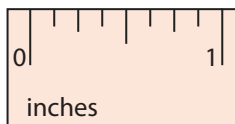
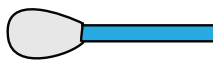
\_\_\_\_\_

2)



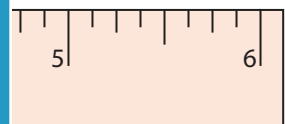
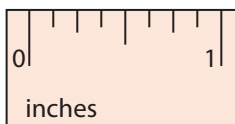
\_\_\_\_\_

3)



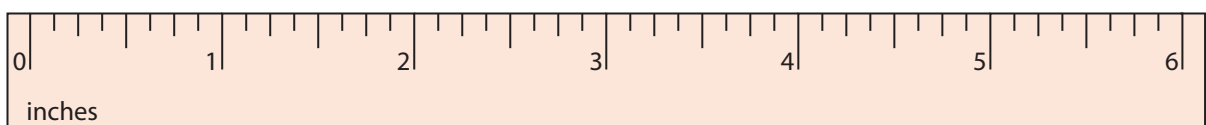
\_\_\_\_\_

4)



\_\_\_\_\_

5)



\_\_\_\_\_

# PREVIEW

Gain complete access to the largest collection of worksheets in all subjects!

Members, please log in to download this worksheet.

Not a member? Please sign up to gain complete access.

[www.mathworksheets4kids.com](http://www.mathworksheets4kids.com)