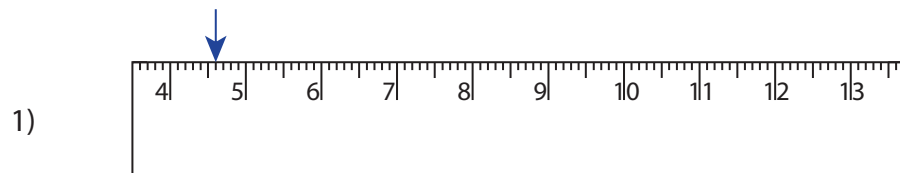



Reading & Marking Ruler

Centimeter and Millimeter: S2

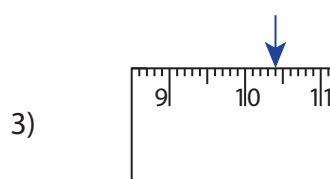
Write the reading shown by the pointer in each problem.



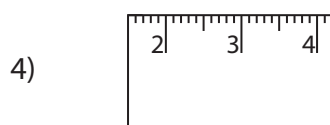
_____ cm _____ mm



_____ cm _____ mm



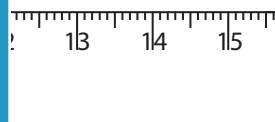
_____ cm _____ mm




_____ cm _____ mm

Draw the pointer to show


5) 11 cm 2 mm




6) 7 cm 8 mm



7) 13 cm 7 mm



8) 6 cm 1 mm

**PREVIEW**

Gain complete access to the largest collection of worksheets in all subjects!

Members, please log in to download this worksheet.

Not a member? Please sign up to gain complete access.

www.mathworksheets4kids.com