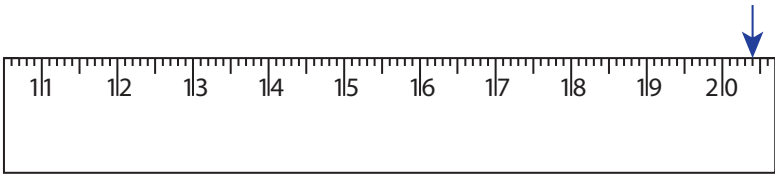
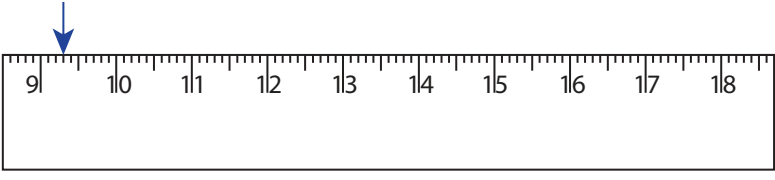


Reading & Marking Ruler

Centimeter and Millimeter: S3

Write the reading shown by the pointer in each problem.

1)  _____ cm _____ mm

2)  _____ cm _____ mm

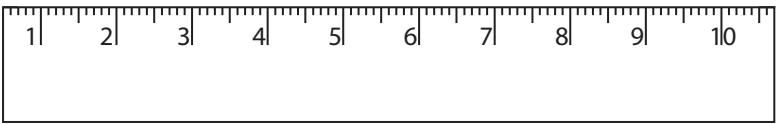
3)  _____ cm _____ mm


4)  _____ cm _____ mm

Draw the pointer to show

5) 10 cm 6 mm 

6) 4 cm 7 mm 

7) 2 cm 8 mm 

8) 12 cm 1 mm 

PREVIEW

Gain complete access to the largest collection of worksheets in all subjects!

Members, please log in to download this worksheet.

Not a member? Please sign up to gain complete access.

www.mathworksheets4kids.com