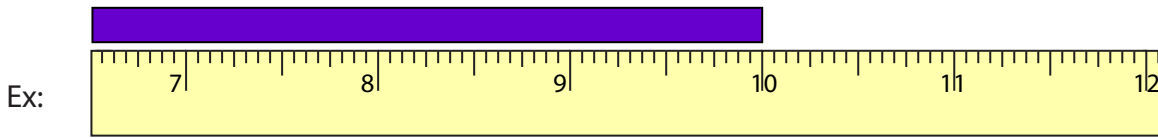


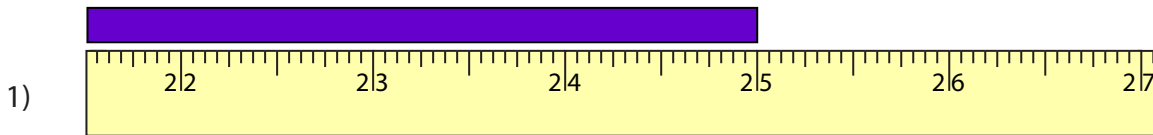
**Reading Tapes**

Whole inches: S1

Measure the length of each bar.



\_\_\_\_\_ **10** in



\_\_\_\_\_ in



\_\_\_\_\_ in



\_\_\_\_\_ in



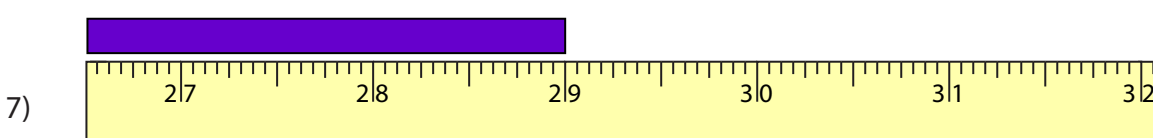
\_\_\_\_\_ in



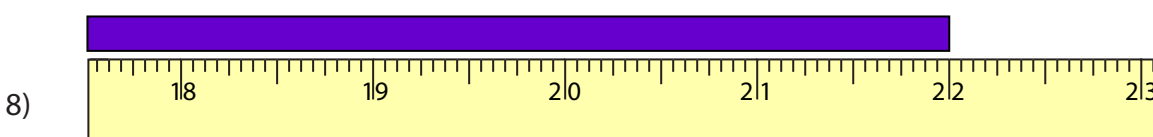
\_\_\_\_\_ in



\_\_\_\_\_ in



\_\_\_\_\_ in



\_\_\_\_\_ in

**PREVIEW**

Gain complete access to the largest collection of worksheets in all subjects!

Members, please log in to download this worksheet.

Not a member? Please sign up to gain complete access.

[www.mathworksheets4kids.com](http://www.mathworksheets4kids.com)