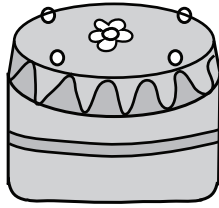


Weight - More/Less

Metric Units: S1


Choose the correct choice that describes the weight of each object.

1)



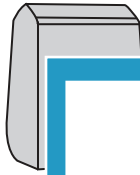
More than 100 g Less than 100 g

2)



More than 250 g Less than 250 g

3)



More than 10 kg

4)



Less than 3 g

5)



More than 500 g



Less than 2 kg

7)




More than 150 g Less than 150 g



More than 20 kg Less than 20 kg

9)



More than 25 g Less than 25 g

10)



More than 750 g Less than 750 g

PREVIEW

Gain complete access to the largest collection of worksheets in all subjects!

Members, please log in to download this worksheet.

Not a member? Please sign up to gain complete access.

www.mathworksheets4kids.com