

**Weight - More/Less**

Metric Units: S3

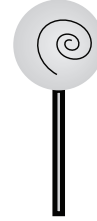
Choose the correct choice that describes the weight of each object.

1)



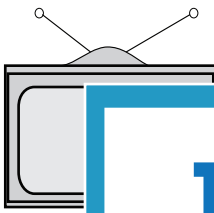
More than 10 kg     Less than 10 kg

2)



More than 250 g     Less than 250 g

3)



More than 1 kg

4)



Less than 2 kg

5)



More than 20 g



Less than 10 g

7)




More than 5 kg     Less than 5 kg



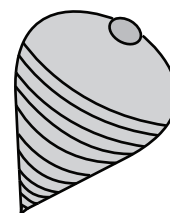
More than 100 g     Less than 100 g

9)



More than 700 g     Less than 700 g

10)



More than 5 g     Less than 5 g

**PREVIEW**

Gain complete access to the largest collection of worksheets in all subjects!

Members, please log in to download this worksheet.

Not a member? Please sign up to gain complete access.

[www.mathworksheets4kids.com](http://www.mathworksheets4kids.com)