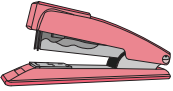




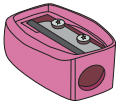

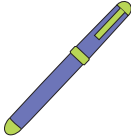


How Much Money?

Add the prices of the items, and write the total amount.

 73¢	 9¢	 28¢	 55¢
 12¢	 4¢	 17¢	 29¢

1)  + **PREVIEW** = _____ ¢

2)  + Gain complete access to the largest collection of worksheets in all subjects! = _____ ¢

3)  + Members, please log in to download this worksheet. Not a member? Please sign up to gain complete access. = _____ ¢

4)  + www.mathworksheets4kids.com = _____ ¢

5)  +  +  = _____ ¢

6)  +  = _____ ¢