


What's Left?

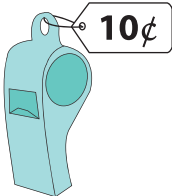
Subtract the price of each item from the amount and write what's left.

Amount

Price of the item

What's left?

1) 

—  = _____

2) 


PREVIEW

Gain complete access to the largest collection of worksheets in all subjects!


Members, please log in to download this worksheet.

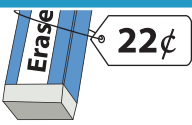
Not a member? Please sign up to gain complete access.


www.mathworksheets4kids.com

3) 

4) 

5) 

—  = _____

6) 

—  = _____