


What's Left?


Subtract the price of each item from the amount and write what's left.

Amount


Price of the item

What's left?


1) 

—  =

2) 


3) 

4) 

5) 

6) 

—  =

—  =

PREVIEW

Gain complete access to the largest collection of worksheets in all subjects!

Members, please log in to download this worksheet.

Not a member? Please sign up to gain complete access.

www.mathworksheets4kids.com